

Name: _____

Morning Math

Write the date.

_____ , _____ , _____

_____ , _____ , _____





Determine the missing numbers.

$32 + 27 = \square$	$54 + 42 = \square$	$\square = 72 - 27$
---------------------	---------------------	---------------------

Color in two different ways to show the amount.

A collection of US coins including quarters, dimes, nickels, and pennies. In the center is a jar with a label that says "42c".

Write <, > or = in the jar to compare.

252  392	683  542
522  562	822  909

Show the time.

An analog clock showing 5:10 and a digital clock showing 5:10.

It is five ten.

Solve the problem.

Robert saw 32 frogs in the pond. When he got closer, 16 jumped away. How many frogs were left in the pond?
